

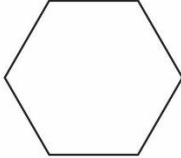
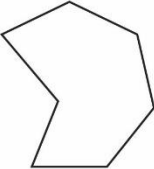
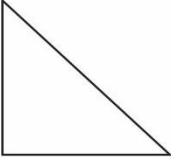


Who chose which shape?

Each of the animals chose a different shape from the table below. Use the following clues and write the name of animals under their shape.

Here are the shapes they chose.



Lion



Rabbit



Fox



Elephant



Monkey

CLUES

Lion's shape has 4 sides.

Rabbit's shape has more than one right angle.

Fox's shape has more than 4 sides.

Elephant's shape has just one line of symmetry.

Monkey's shape has sides all the same length.