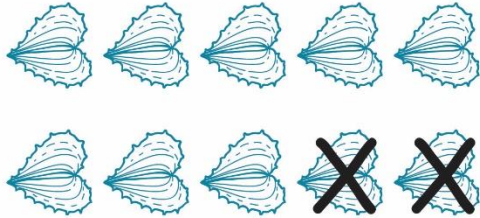
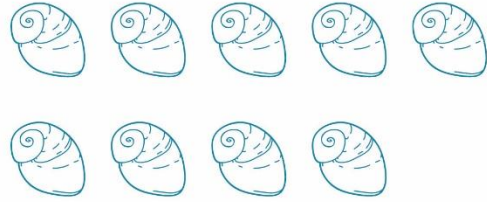


SeaShell Subtraction

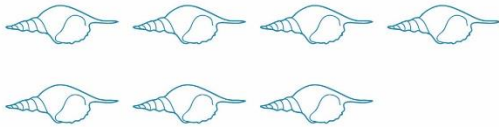
Draw an X to show what is subtracted and solve the question.



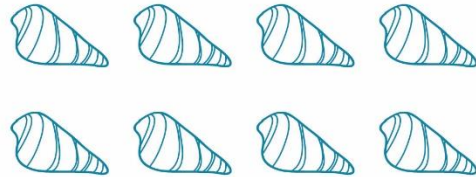
$$10 - 2 = \underline{\quad}$$



$$9 - 4 = \underline{\quad}$$




$$7 - 3 = \underline{\quad}$$



$$8 - 6 = \underline{\quad}$$



$$4 - 4 = \underline{\quad}$$



$$5 - 2 = \underline{\quad}$$