



NUMBERS: UNDER THE SEA 2

Circle the total number.


HOW MANY?




5 6 7 8 9




5 6 7 8 9



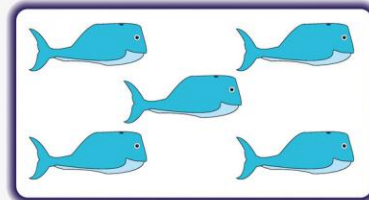
5 6 7 8 9




5 6 7 8 9



5 6 7 8 9



5 6 7 8 9



5 6 7 8 9



5 6 7 8 9